

ENTRANCE EXAMINATION-2015**Ph. D. Chemistry****TIME: 2 HOURS****MAXIMUM MARKS: 75****HALL TICKET NUMBER:****INSTRUCTIONS**

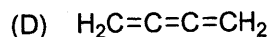
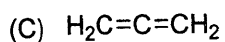
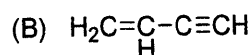
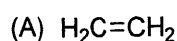
1. Write your **HALL TICKET NUMBER** in the space provided above and also in the **OMR ANSWER SHEET** given to you.
2. Make sure that pages numbered from **1 - 14** (excluding 3 pages assigned for rough work) are present.
3. There are 55 (Fifty five) multiple choice questions in this paper (15 in Part-A + 40 in Part-B). You are required to answer all questions of Part-A and maximum 15 questions from Part-B. If more than the required numbers of questions are answered only the first 15 questions of Part-B will be taken up for evaluation.
4. Each questions of Part-A carries **ONE** mark only, whereas each question of Part-B carries **FOUR** marks.
5. **There is negative marking. Each wrong answer in Part-A carries -0.33 mark and in Part-B carries -1.32 marks.**
6. Answers are to be marked on the OMR answer sheet following the instructions provided on it.
7. Hand over the OMR answer sheet at the end of the examination to the Invigilator.
8. In case of a tie, the marks obtained in the first 15 questions (**PART-A**) will be used to determine the order of merit.
9. No additional sheets will be provided. Rough work can be done in the space provided at the end of the booklet.
10. Calculators are allowed. Cell phones are not allowed.
11. Useful constants are provided at the beginning of PART-A in the question paper.
12. OMRs without hall ticket number will not be evaluated and University shall not be held responsible.

Useful constants:

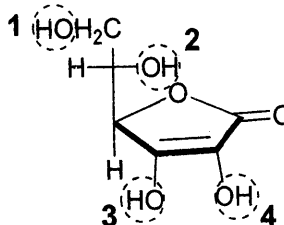
Rydberg constant = 109737 cm^{-1} ; Faraday constant = 96500 C ; Planck constant = $6.625 \times 10^{-34} \text{ J s}$; Speed of light = $2.998 \times 10^8 \text{ m s}^{-1}$; Boltzmann constant = $1.380 \times 10^{-23} \text{ J K}^{-1}$; Gas constant = $8.314 \text{ J K}^{-1} \text{ mol}^{-1}$; Mass of electron = $9.109 \times 10^{-31} \text{ kg}$; Mass of proton = $1.672 \times 10^{-27} \text{ kg}$; Charge of electron = $1.6 \times 10^{-19} \text{ C}$; $1 \text{ D} = 3.336 \times 10^{-30} \text{ Cm}$; $1 \text{ bar} = 10^5 \text{ Nm}^{-2}$; RT/F (at 298.15 K) = 0.0257 V ; $1 \text{ kcal/mol} = 350 \text{ cm}^{-1}$.

Part-A

1. Which of the following compounds **does not have** a planar molecular configuration?



2. The structural formula for vitamin C is shown below. Of the four hydroxyl groups, identified by circles, which is most acidic?



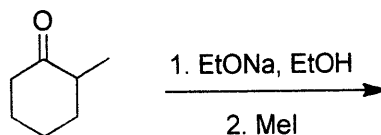
(A) 1

(B) 2

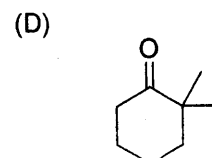
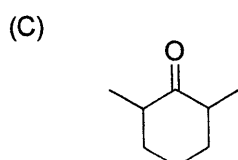
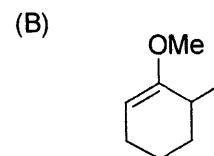
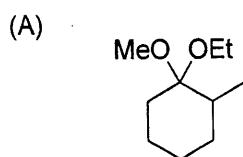
(C) 3

(D) 4

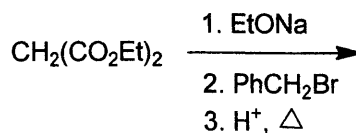
3. The major product in the following transformation



is

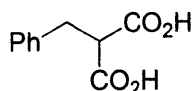


4. The product in the following transformation

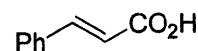


is

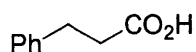
(A)



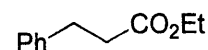
(B)



(C)



(D)



5. Identify the naturally occurring amino acids, which are having two chiral centres:

(A) Lysine and Arginine

(B) Serine and Phenylalanine

(C) Leucine and Proline

(D) Threonine and Isoleucine

6. The alloy Cu_3Au crystallizes in a cubic lattice with Cu at the face centers and Au at the corners. The number of formula unit/s of the alloy in each unit cell is

(A) 1

(B) 2

(C) 3

(D) 4

7. Among octahedral Ti^{2+} , V^{2+} , Ni^{2+} and Cu^{2+} all are expected to show spin-only moments except for the following one which is expected to show both spin and orbital magnetic moments

(A) Ti^{2+}

(B) V^{2+}

(C) Ni^{2+}

(D) Cu^{2+}

8. In tetragonally elongated high-spin $[\text{MnF}_6]^{3-}$ the highest energy valence electron of the metal centre resides in

(A) d_{xz} orbital

(B) d_{z^2} orbital

(C) $d_{x^2-y^2}$ orbital

(D) d_{yz} orbital

9. The carbonyl complex following 18-electron rule is

(A) $\text{Cr}(\text{CO})_4$

(B) $\text{Mn}(\text{CO})_5$

(C) $\text{V}(\text{CO})_6$

(D) $\text{Ti}(\text{CO})_7$

10. The number of M-M bonds present in $\text{Co}_4(\text{CO})_{12}$ is

- (A) 3 (B) 4 (C) 5 (D) 6

11. The number of degrees of freedom of water at its triple point is

- (A) 0 (B) 1 (C) 2 (D) 3

12. If equal volumes of solutions with $\text{pH}=2$ and $\text{pH}=7$ are mixed, the pH of the resulting solution is:

- (A) 9.0 (B) 5.0 (C) 4.5 (D) 2.3

13. The canonical ensemble is represented by a system with

- (A) constant NVE . (B) constant NVT .
(C) constant μVT . (D) constant NPT .

14. Among the following the well-behaved function is

- (A) $e^{-x}[0 \leq x \leq \infty]$ (B) $e^{-x}[-\infty \leq x \leq \infty]$
(C) $e^{-|x|}[-\infty \leq x \leq \infty]$ (D) $\sin^{-1} x [-1 \leq x \leq 1]$

15. *trans*-Dichloroethene belongs to the symmetry point group

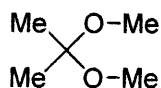
- (A) C_{2v} (B) C_{3v} (C) C_{2h} (D) D_{2d}

End of Part-A

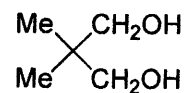
Part B

16. A compound with the $C_5H_{12}O_2$ formula has strong infrared absorption in the region 3300 to 3400 cm^{-1} . The ^1H NMR spectrum has three singlets at δ 0.9, δ 3.45 and δ 3.2 ppm with the relative intensities 3:2:1, respectively. The ^{13}C NMR spectrum shows three signals all at less than δ 100. Suggest a structure for this compound.

(A)



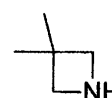
(B)




(C)



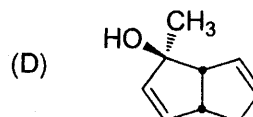
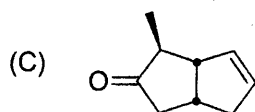
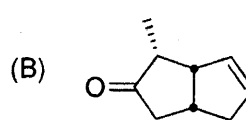
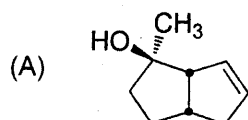
(D)



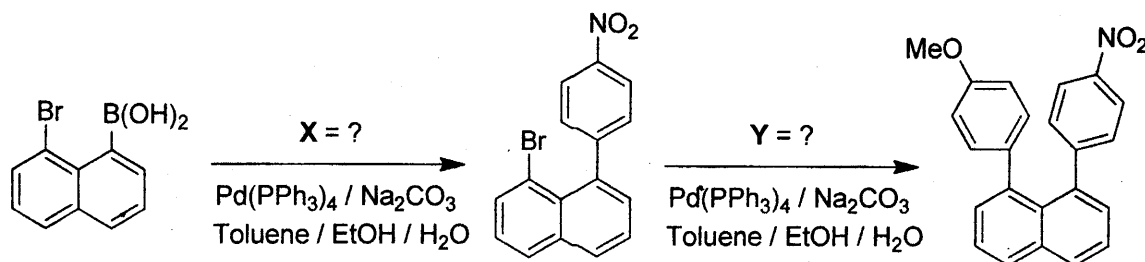
17. The product of the following rearrangement reaction



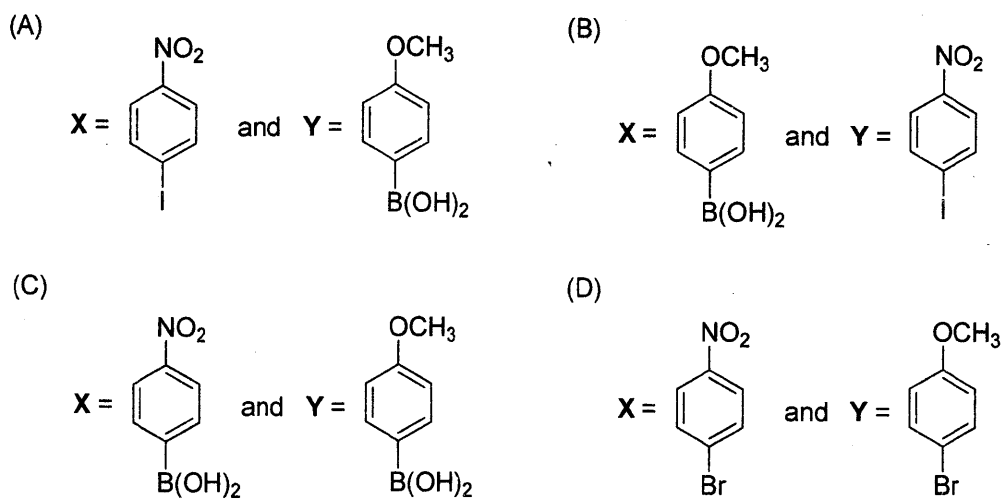
is



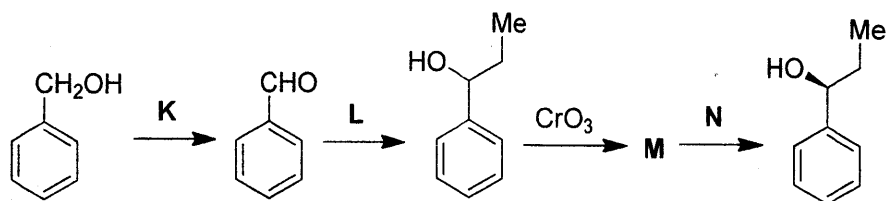
18. The missing reagents in the following transformation



is

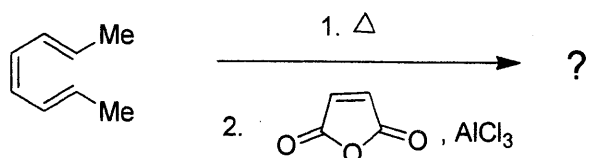


19. Identify **K**, **L**, **M** and **N** from the following reaction sequence.

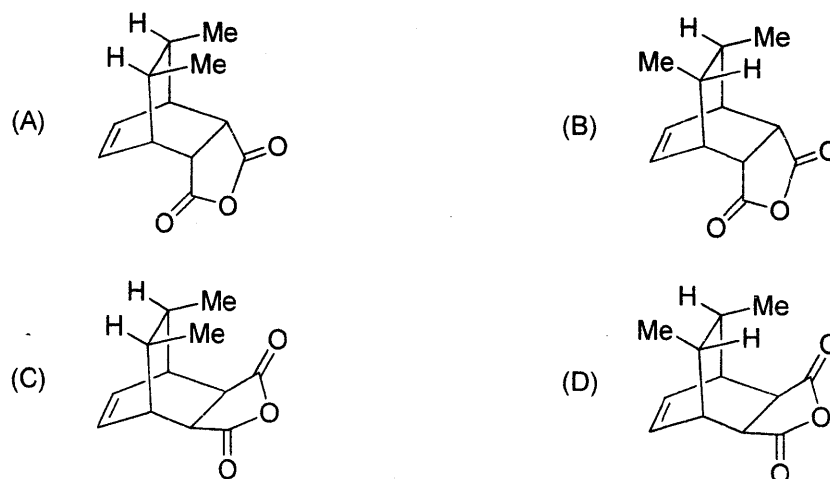


- (A) **K** = PCC; **L** = EtMgBr; **M** = PhCOMe; **N** = (*R*)-BINAL-H
- (B) **K** = PCC; **L** = EtMgBr; **M** = PhCOEt; **N** = (*S*)-BINAL-H
- (C) **K** = CrO₃; **L** = EtMgBr; **M** = PhCOEt; **N** = (*S*)-BINAL-H
- (D) **K** = PCC; **L** = EtMgBr; **M** = PhCOEt; **N** = LiAlH₄

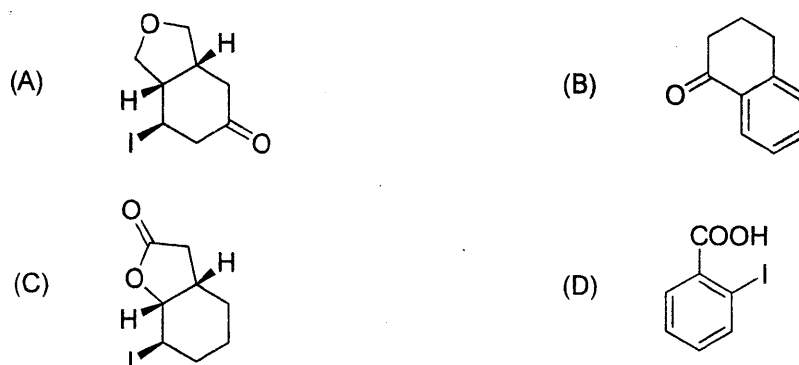
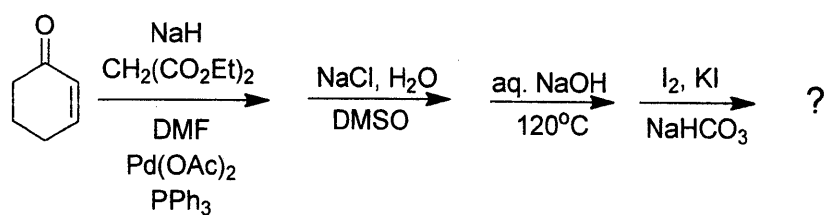
20. The product obtained in the following transformation



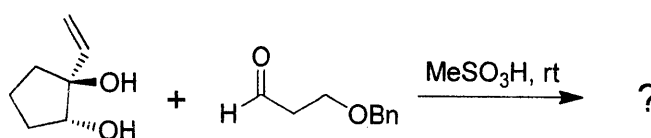
is



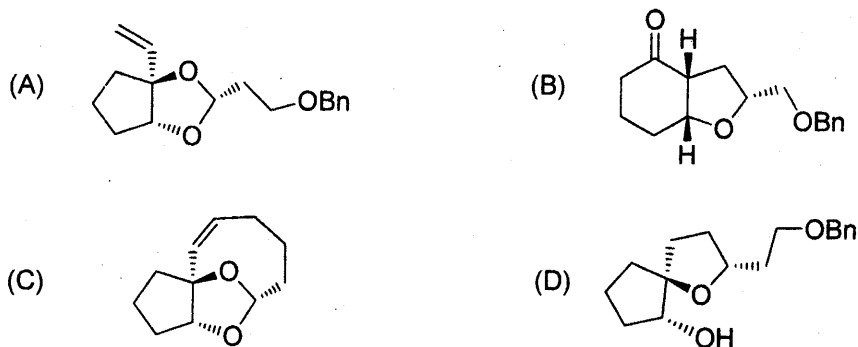
21. The final product of the following sequence of reactions is



22. The product of the following reaction



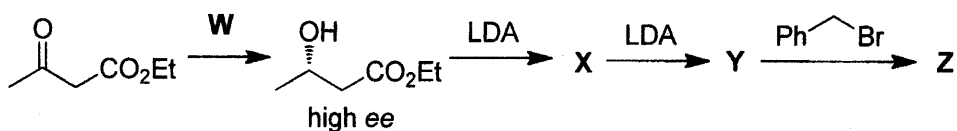
is

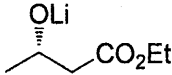
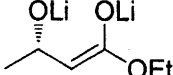
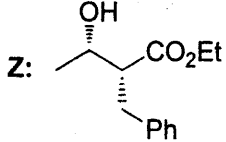
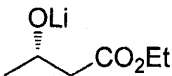
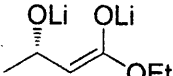
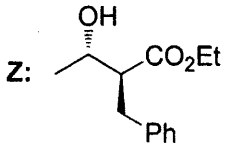
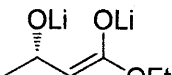
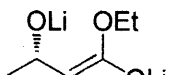
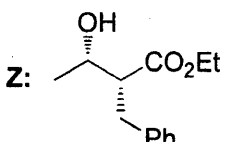
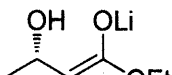
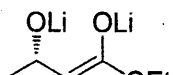
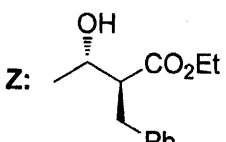


23. If the volume of a typical bacterial cell is $1.0 \mu\text{m}^3$, the number of hydrogen ions present in the bacterial cell at pH 7.0 is, approximately:

- (A) 60 (B) 6×10^2 (C) 6×10^3 (D) 6×10^4

24. Identify W, X, Y and Z from the following reaction sequence.

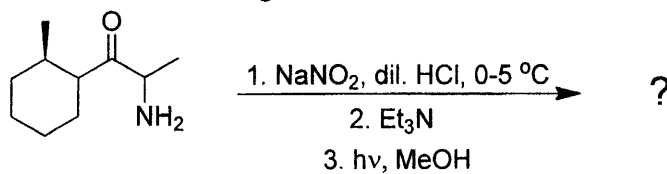


- (A) W: Baker's yeast X:  Y:  Z: 
- (B) W: Baker's yeast X:  Y:  Z: 
- (C) W: $\text{BH}_3 \cdot \text{SMe}_2$ X:  Y:  Z: 
- (D) W: LiBH_4 X:  Y:  Z: 


25. The most significant peaks in the mass spectrum of 3-hexanone will be seen at m/z values of:

- (A) 100, 85, 71, 57 (B) 100, 72, 71, 57
(C) 100, 85, 71, 43 (D) 100, 71, 57, 43

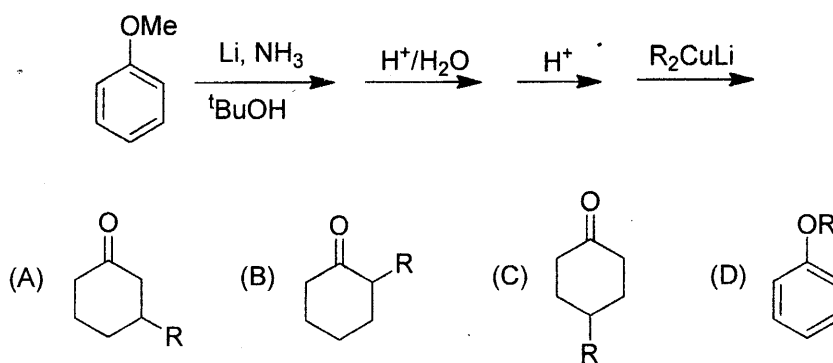
26. The product obtained in the following transformation



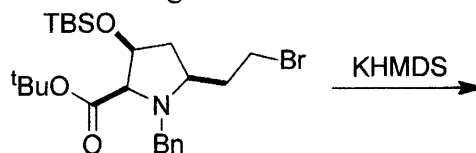
is



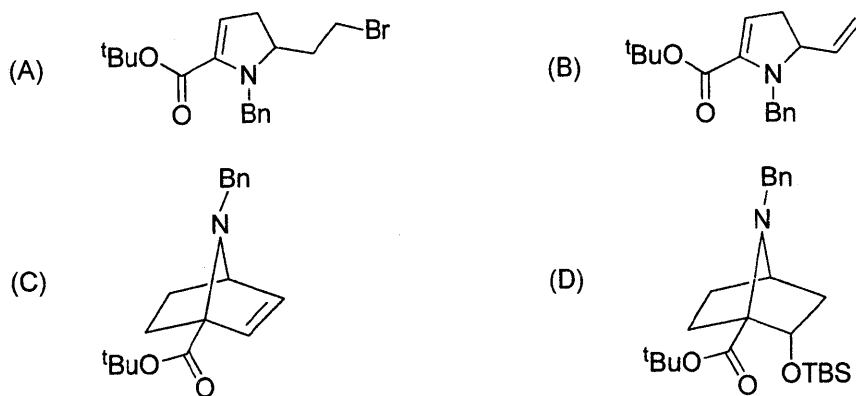
27. The final product of the following sequence of reactions is



28. The product expected in the following reaction



is



29. A Trigonal-bipyramidal complex of formula $[M(L-L)A_2X]$ (A and X are unidentate ligands; L-L represents a bidentate ligand) can have

- (A) 3 geometrical isomers and one of them will be optically active
 (B) 4 geometrical isomers and two of them will be optically active
 (C) 3 geometrical isomers and two of them will be optically active
 (D) 4 geometrical isomers and one of them will be optically active

30. The number of isomers for the trigonal bipyramidal molecule PF_3Cl_2 with a non zero dipole moment is

- (A) 2 (B) 1 (C) 0 (D) 3

31. The equilibrium constant (K) for the reaction $(CH_3)_2NH_2^+ + (CH_3)_3N \rightleftharpoons (CH_3)_2NH + (CH_3)_3NH^+$ is 960 at $25^\circ C$. If the proton affinity of dimethylamine is 930 kJ/mol, what is the proton affinity of trimethylamine? ($R = 8.31 \text{ J/K mol}$ and the entropy for proton transfer is approximately zero).

- (A) 930 kJ/mol (B) 947 kJ/mol (C) 960 kJ/mol (D) 977 kJ/mol

32. The standard reduction potential E° for $Cd^{2+} + 2e^- \rightleftharpoons Cd$ is -0.40 V . What is the value of pH (at $[Cd^{2+}] = 1 \text{ M}$ and pressure of H_2 is 1 bar) above which reduction of Cd^{2+} by H_2 to Cd metal will be spontaneous.

- (A) 0 (B) 2 (C) 4 (D) 6

33. The Russel-Saunders ground state term symbols for d^7 and d^9 ions are
 (A) 3F_4 and 1S_0 respectively (B) 1S_0 and 3F_4 respectively
 (C) $^4F_{9/2}$ and $^2D_{3/2}$ respectively (D) $^4F_{9/2}$ and $^2D_{5/2}$ respectively
34. The hardness of a pond water is 6 ppm. The amount of CaCO_3 dissolved in 200 mL of that pond water is [1 ppm = 1g of CaCO_3 in 10^6 mL, atomic mass of Ca = 40]
 (A) 1.2×10^{-4} g (B) 1.2×10^{-3} g (C) 2.1×10^{-3} g (D) 3.0×10^{-4} g
35. Using Wade's rule predict the structure of $\text{Os}_5(\text{CO})_{16}$
 (A) square pyramid (B) trigonal bipyramid
 (C) capped tetrahedron (D) butterfly shaped
36. The axial ligands of myoglobin, cytochrome P-450 and catalase respectively are
 (A) Imidazole, Thiolate and Phenolate (B) Imidazole, Phenolate and Thiolate
 (C) Phenolate, Thiolate and Imidazole (D) Thiolate, Imidazole and Phenolate
37. A sample of pure sodium oxalate ($\text{Na}_2\text{C}_2\text{O}_4$) weighing 0.2856 g is dissolved in water. Excess sulphuric acid is added and the resultant solution is titrated at 70°C , using 45.12 ml of a KMnO_4 solution. The end point is overrun and the back titration is carried out with 1.74 ml of 0.0516 M oxalic acid solution. The molarity of the KMnO_4 solution is
 (A) 0.01969 mmol/ml (B) 0.01969 mol/ml
 (C) 0.089784 mmol/ml (D) 2.32819 mmol/ml
38. Reaction of benzene with an alkali metal ion leads to the formation of a radical anion $[\text{C}_6\text{H}_6]^-$. The electron paramagnetic resonance spectrum of the radical anion involving hyperfine coupling with all six hydrogens will show a $[I = \frac{1}{2}$ for Hydrogen atom]
 (A) Seven line pattern (B) One line pattern
 (C) Four line pattern (D) Six line pattern

39. Gaseous N_2O_5 when compressed display ionic character in the crystal lattice ($\text{NO}_2^+\text{NO}_3^-$). Which spectroscopic method can be employed to confirm this transformation?

- (A) Nuclear magnetic resonance spectroscopy
 (B) Electron paramagnetic resonance spectroscopy
 (C) Vibrational spectroscopy
 (D) Photoelectron spectroscopy

40. A cell is set up as follows:



The voltage of the cell and the equilibrium constant of the cell reactions are,

$$[E_{\text{Cd}^{2+}/\text{Cd}}^{\circ} = -0.44 \text{ V}, E_{\text{Fe}^{2+}/\text{Fe}}^{\circ} = -0.40 \text{ V}, T = 298 \text{ K}]$$

- (A) -0.02 V and 23 (B) $+0.02 \text{ V}$ and 23 (C) $+0.04 \text{ V}$ and 4.8 (D) -0.02 V and 4.8

41. In the compounds $\text{Co}_2(\text{CO})_x$ and $\text{H}_y\text{Cr}(\text{CO})_5$, the numbers x and y are respectively

- (A) 8 and 2 (B) 6 and 2 (C) 8 and 1 (D) 6 and 1

42. The molecules CH_3Cl , CCl_4 , SO_2 and SiH_4 are

- (A) symmetric, spherical, asymmetric and spherical tops
 (B) spherical, spherical, symmetric and symmetric tops
 (C) asymmetric, symmetric, asymmetric and symmetric tops
 (D) spherical, symmetric, asymmetric and symmetric tops

43. ^{199}Hg nucleus has a gyromagnetic ratio of $4.8154 \times 10^{-7} \text{ rad T}^{-1} \text{ s}^{-1}$. The frequency at which ^{199}Hg will produce an NMR signal at a magnetic field of 1.5 Tesla is

- (A) 5.42 MHz (B) 9.81 GHz (C) 10.93 MHz (D) 11.42 MHz

44. In a reversible isothermal expansion at 298 K, an ideal gas changes its volume from V to $2V$. What is the change in the molar internal energy of the gas?

- (A) $+2.27 \text{ kJ mol}^{-1}$ (B) 0 J mol^{-1} (C) $+1.72 \text{ kJ mol}^{-1}$ (D) $-2.27 \text{ kJ mol}^{-1}$

45. From fundamental equation $dA = -SdT - PdV$, the Maxwell relation obtained is

- (A) $\left(\frac{\partial S}{\partial P}\right)_T = \left(\frac{\partial V}{\partial S}\right)_P$ (B) $\left(\frac{\partial S}{\partial V}\right)_P = \left(\frac{\partial P}{\partial T}\right)_V$
 (C) $\left(\frac{\partial T}{\partial V}\right)_S = \left(\frac{\partial P}{\partial S}\right)_T$ (D) $\left(\frac{\partial S}{\partial V}\right)_T = \left(\frac{\partial P}{\partial T}\right)_V$

46. An element with atomic radius of 1.7 \AA forms crystals with a face-centered lattice. In an X-ray diffraction experiment using $\text{Cu K}\alpha$ radiation ($\lambda = 1.54 \text{ \AA}$), the first order diffraction from the (111) planes will occur at a 2θ value of :

- (A) 13.0° (B) 16.8° (C) 32.2° (D) 64.9°

47. At 25°C the values of Λ^∞ are: sodium benzoate, $82.5 \times 10^{-4} \text{ S m}^2/\text{mol}$; hydrochloric acid, $426.2 \times 10^{-4} \text{ S m}^2/\text{mol}$; sodium chloride, $126.5 \times 10^{-4} \text{ S m}^2/\text{mol}$. The Λ^∞ for benzoic acid will be

- (A) $217.2 \text{ S m}^2/\text{mol}$ (B) $299.7 \text{ S m}^2/\text{mol}$ (C) $382.2 \text{ S m}^2/\text{mol}$ (D) $343.7 \text{ S m}^2/\text{mol}$

48. The value of the vibrational partition function for I_2 ($\tilde{\nu} = 208 \text{ cm}^{-1}$) at 300 K is given by ($hc/kT = 0.0483 \text{ cm}$ at 298 K)

- (A) 0.633 (B) 1.58 (C) 1.37 (D) 0.73

49. 0.1135 gm of TNT releases 410 calories of heat upon explosion at 27°C . One mole of TNT produces three moles of CO and two moles of N_2 on explosion. When one mole of TNT explodes at 27°C , the ΔH is

- (A) -817 kcal (B) -612 kcal (C) -534 kcal (D) -1022 kcal

50. Normalization constant of the wave function $\psi = \cos(n\pi x/a_0)$ [$0 \leq x \leq a_0$; $n = 0, 1, 2, \dots$] is

- (A) a_0 (B) $\sqrt{2/a_0}$ (C) $\sqrt{a_0/2}$ (D) $2/a_0$

51. The spacing between the lines in the microwave spectrum of $^{39}\text{K}^{127}\text{I}$ is 3634 MHz. The bond length of $^{39}\text{K}^{127}\text{I}$ is

- (A) $\sim 305 \text{ pm}$ (B) $\sim 600 \text{ pm}$ (C) $\sim 380 \text{ pm}$ (D) $\sim 410 \text{ pm}$

52. The value of $\langle x^2 \rangle$ for the ground state of a harmonic oscillator with mass μ and force constant k is

- (A) $\hbar/2\sqrt{\mu k}$ (B) $2\hbar/\sqrt{\mu k}$ (C) $\hbar/2\mu k$ (D) $2\hbar/\mu k$

53. The fundamental and first overtone in the IR spectrum of $^{12}\text{C}^{16}\text{O}$ occur at 2143 and 4269 cm^{-1} , respectively. The values of $\bar{\nu}_e$ and $\bar{\nu}_e x_e$ for $^{12}\text{C}^{16}\text{O}$ are

- (A) 3000 and 100 cm^{-1} (B) 2143 and 13 cm^{-1}
 (C) 2169 and 13 cm^{-1} (D) 4260 and 130 cm^{-1}

54. A sample of polystyrene is composed of a series of fractions of different sized molecules as shown in the table below

Fraction	Weight Fraction	Molecular Weight
A	0.10	12000
B	0.19	21000
C	0.24	35000
D	0.18	49000

The weight average molecular weight of this polymer sample is

- (A) 32300 (B) 117000 (C) 51760 (D) 22410

55. A drug is known to be ineffective after 30% decomposition. The original concentration of drug sample was 500 units/mL. After 20 months, the concentration decreased to 420 units/mL. Assuming that the decomposition follows a first-order kinetics, the expiry time of this drug will be:

- (A) 79.4 months (B) 40.9 months
 (C) 80.5 months (D) 49.3 months